

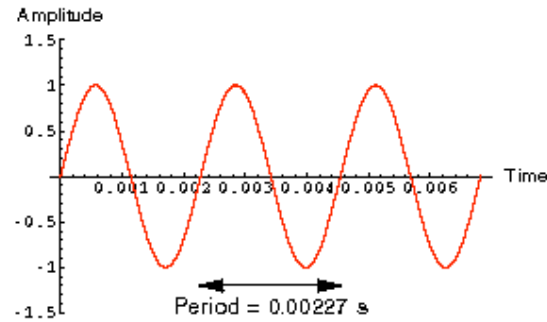
MY FAVORITE FUNCTIONS

OR

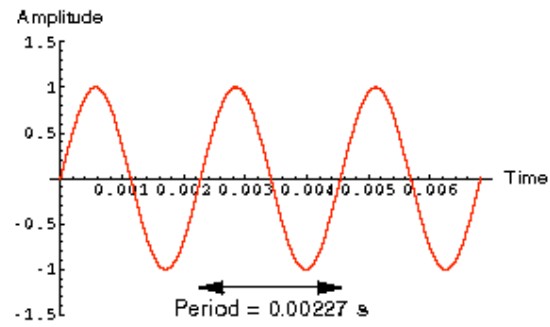
Continuous from *what* to WHAT?!?

Section 1. **Accordions**

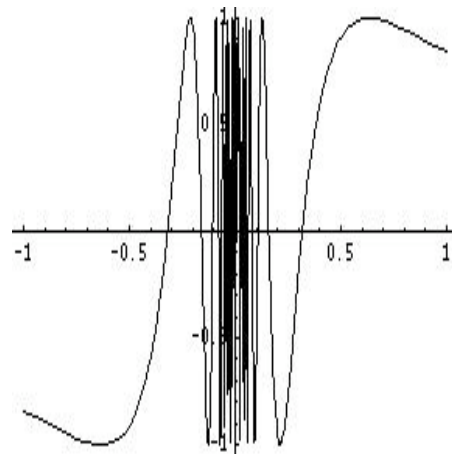
$$y = \sin x$$



$$y = \sin x$$

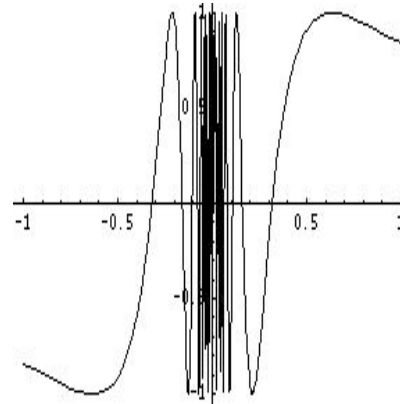


$$y = \sin \frac{1}{x}$$



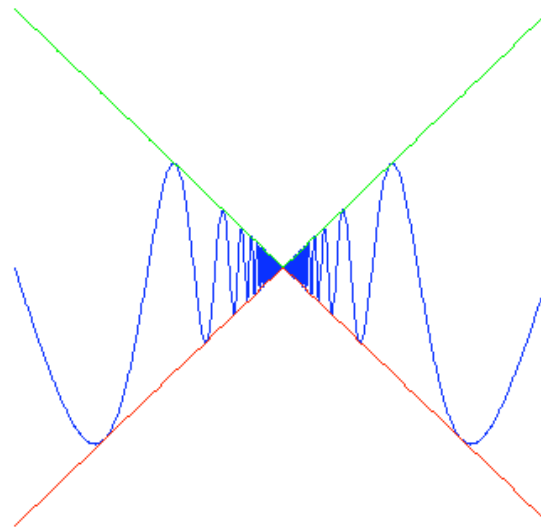
not continuous at 0

$$y = \sin \frac{1}{x}$$



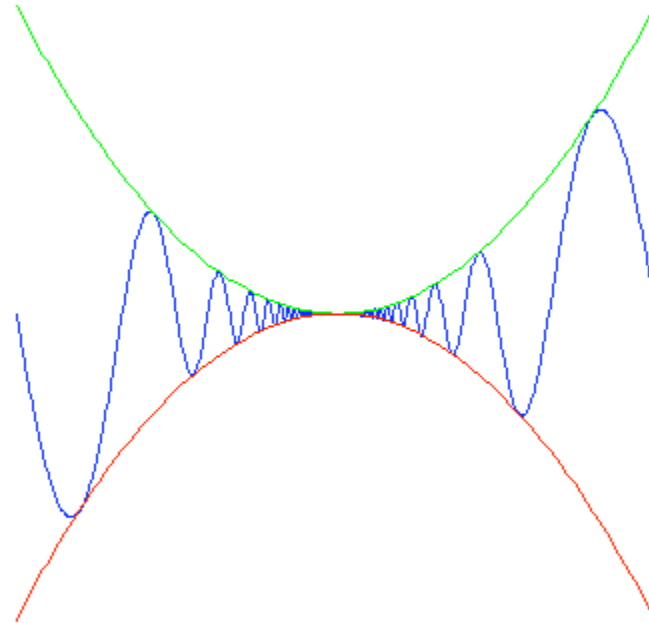
$$f(x) = x \sin \frac{1}{x}$$

f is continuous at 0
even though there are
nearly vertical slopes
as you approach 0.



$$g(x) = x^2 \sin \frac{1}{x}$$

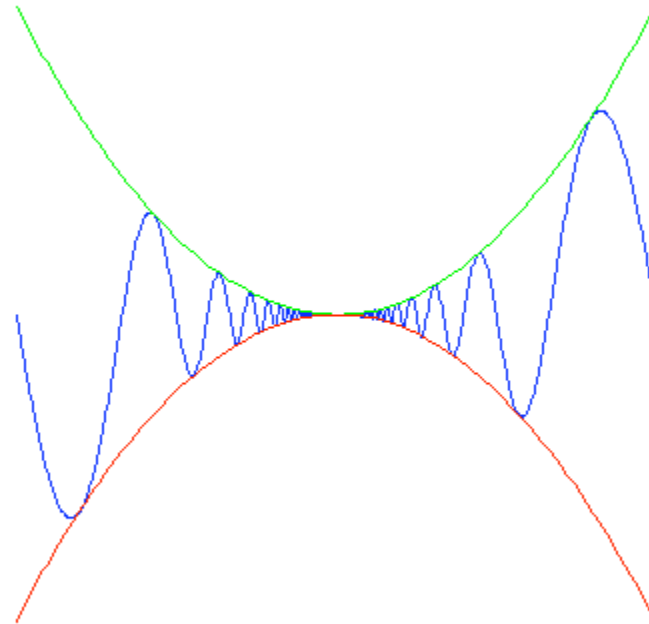
Here $\lim_{h \rightarrow 0} \frac{g(h)}{h} = 0$



$$g(x) = x^2 \sin \frac{1}{x}$$

So g has a
derivative at 0,

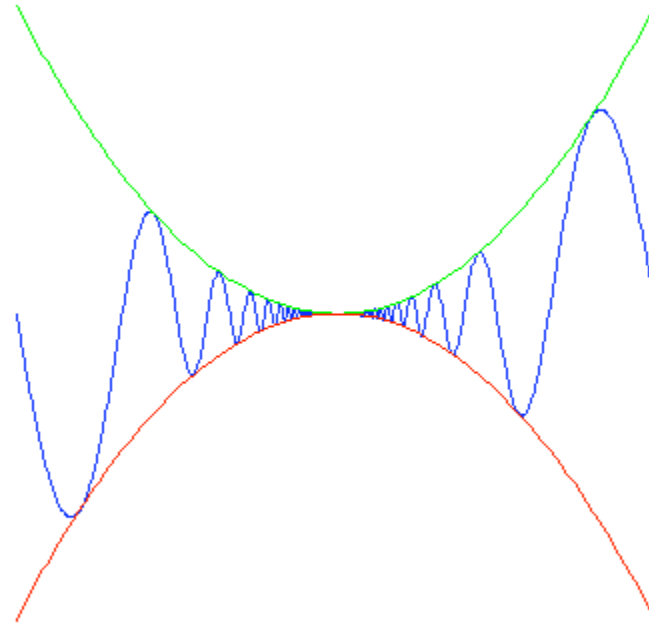
$$g'(0) = \lim_{h \rightarrow 0} \frac{g(h)}{h} = 0$$



$$g(x) = x^2 \sin \frac{1}{x}$$

$$g'(0) = 0.$$

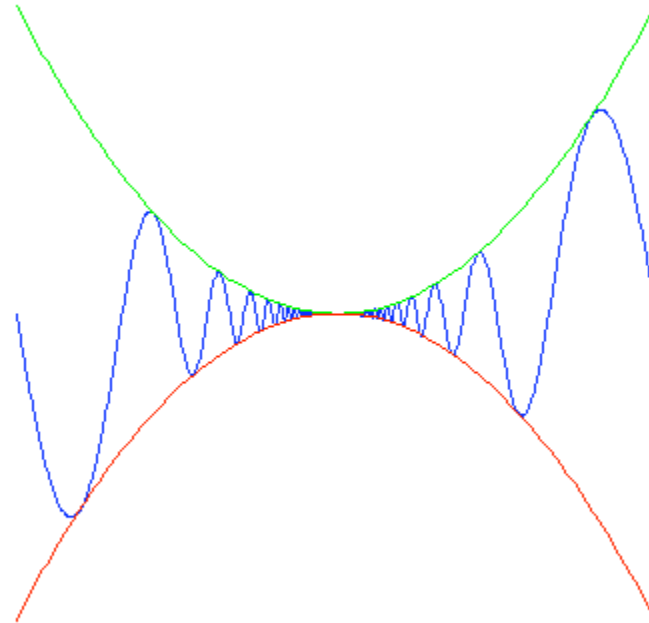
Still we have nearly vertical tangents.



$$g(x) = x^2 \sin \frac{1}{x}$$

$$g'(0) = 0.$$

We have nearly vertical tangents.



Further, there are sequences $\langle a_n \rangle$ and $\langle b_n \rangle$ such that

$$\lim_{n \rightarrow \infty} b_n - a_n = 0, \text{ but } \lim_{n \rightarrow \infty} \frac{g(b_n) - g(a_n)}{b_n - a_n} = \infty.$$

Section 2. **Le Blancmange** function

Fix a non-negative integer n . Given a real number x , let k be the greatest non-negative integer such that

$$a_{(x,n)} = 2^{-n}k \leq x \text{ and let } b_{(x,n)} = 2^{-n}(k+1). \text{ So } x < b_{(x,n)}.$$

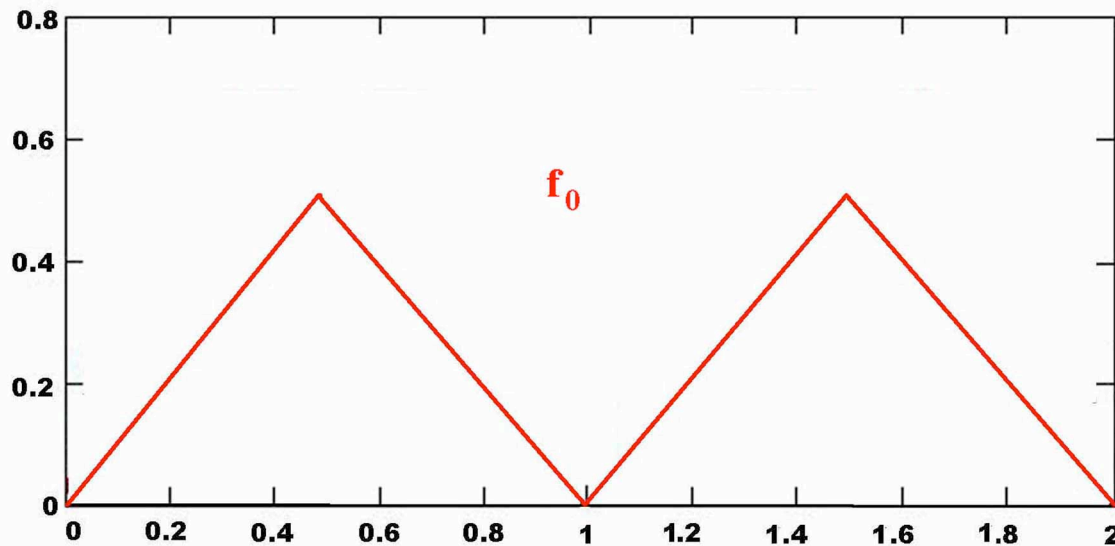
Define $f_n : \mathbf{R} \rightarrow [0,1]$ by $f_n(x) = \min\{x - a_{(x,n)}, b_{(x,n)} - x\}$.

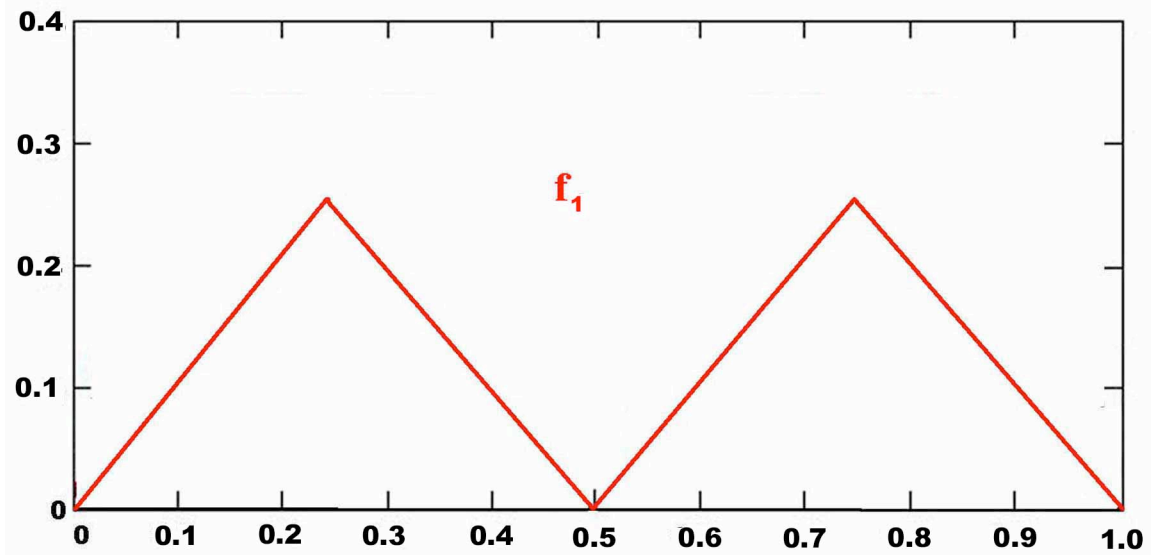
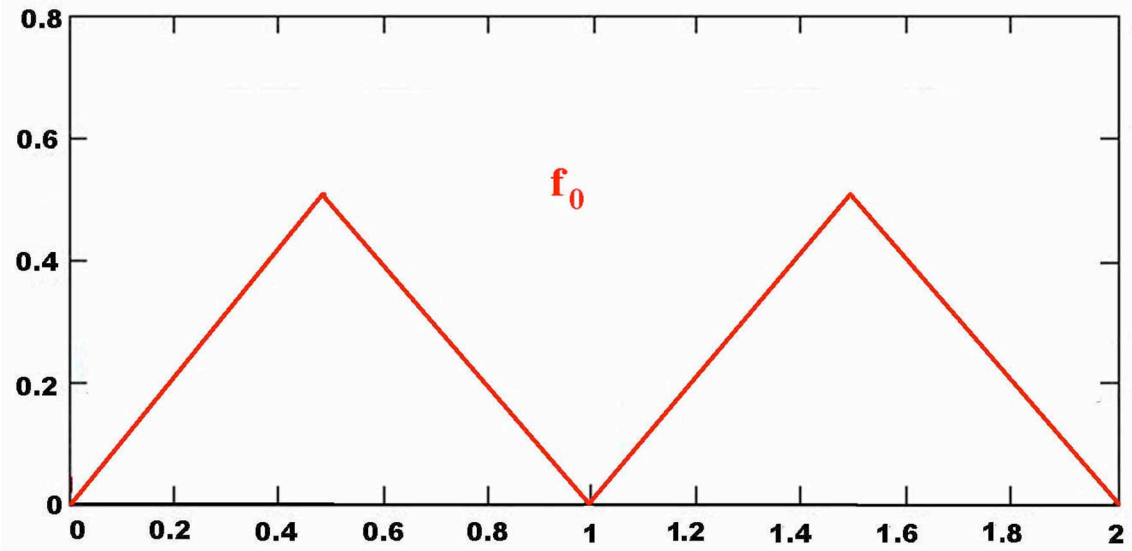
Fix a non-negative integer n . Given a real number x , let k be the greatest non-negative integer such that

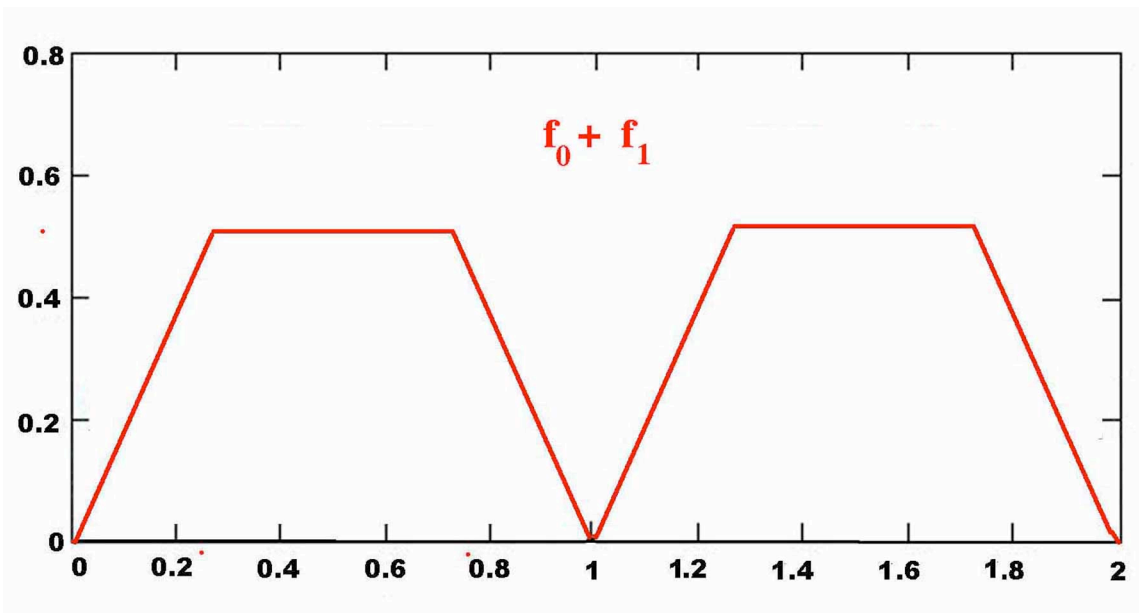
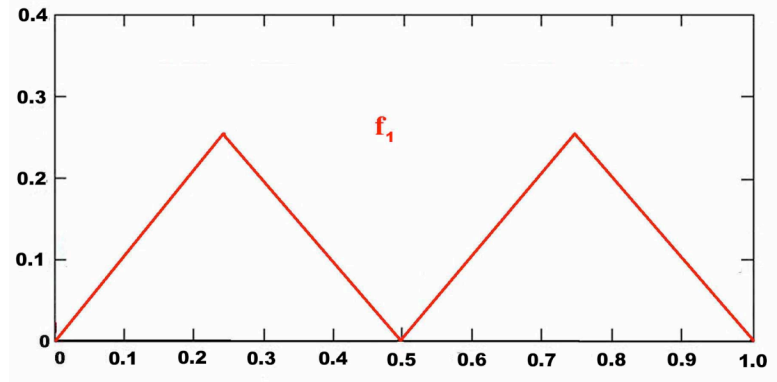
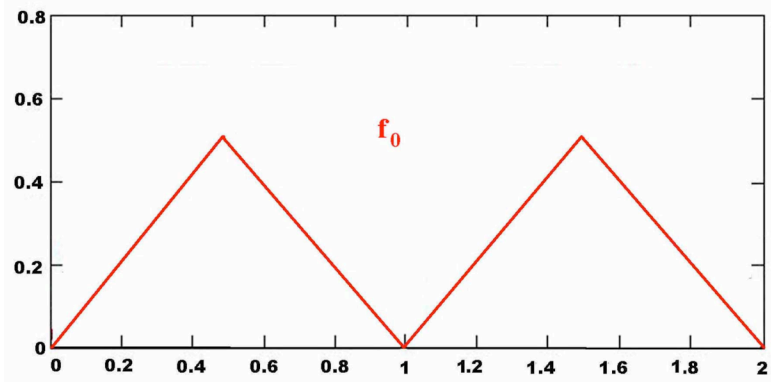
$$a_{(x,n)} = 2^{-n}k \leq x \text{ and let } b_{(x,n)} = 2^{-n}(k+1). \text{ So } x < b_{(x,n)}.$$

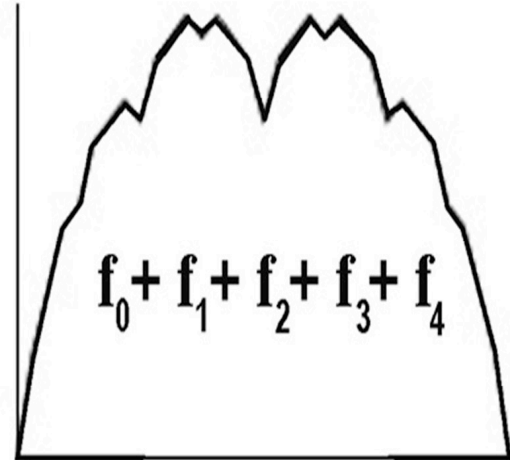
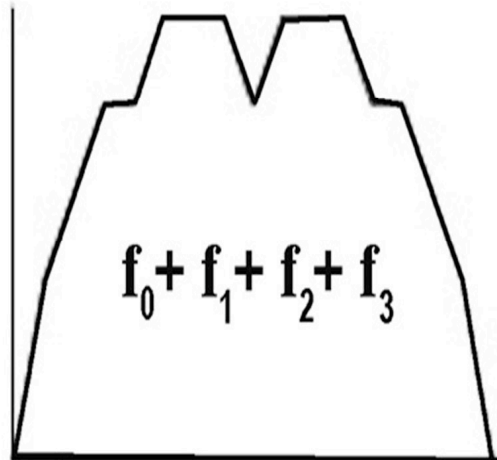
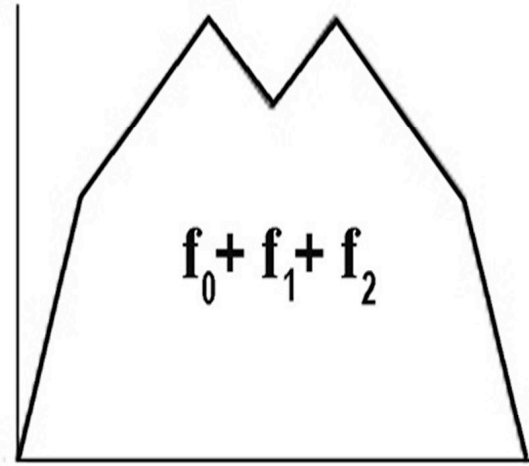
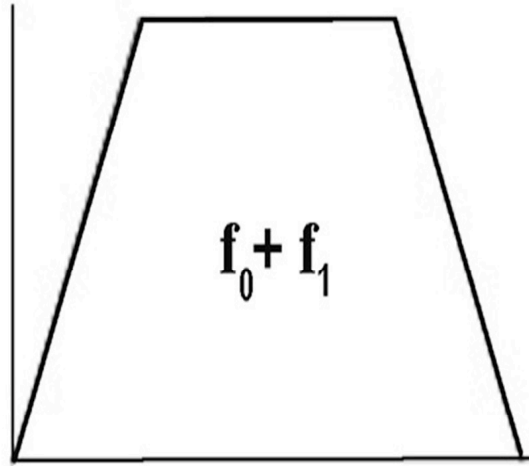
Define $f_n : \mathbf{R} \rightarrow [0,1]$ by $f_n(x) = \min\{x - a_{(x,n)}, b_{(x,n)} - x\}$.

$k = 0$









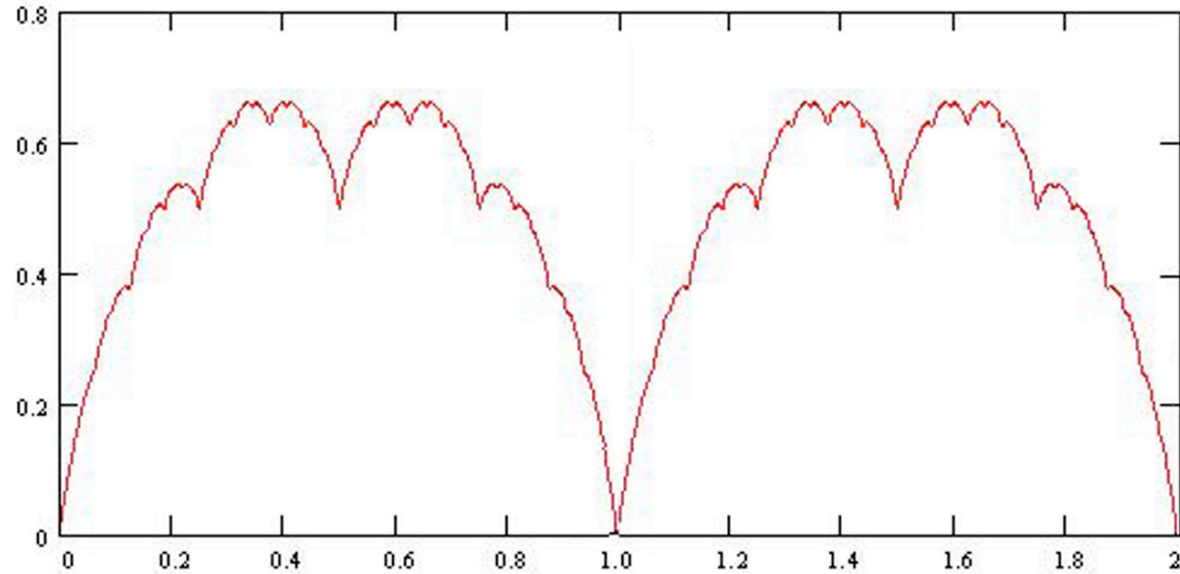
THEOREM 2. There is a function continuous at each real x but differentiable at **no** real x .

$$f(x) = \sum_{n=1}^{\infty} f_n(x)$$

Example:

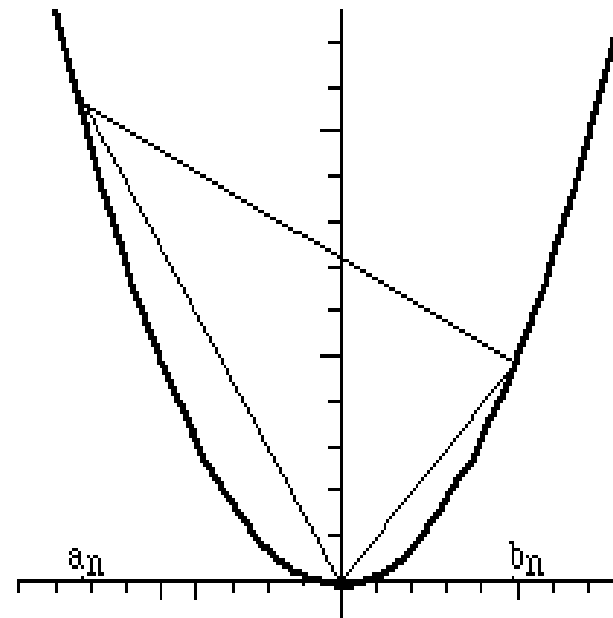
$$f_0\left(\frac{7}{16}\right) = \frac{7}{16}; \quad f_1\left(\frac{7}{16}\right) = \frac{7}{16}; \quad f_2\left(\frac{7}{16}\right) = \frac{1}{16}; \quad \mathbf{f}\left(\frac{7}{16}\right) = \frac{1}{16}.$$

$$f(x) = \sum_{n=1}^{\infty} f_n(x) \leq \sum_{n=1}^{\infty} 2^{-n}$$



Lemma2: Suppose a function $h : \mathbf{R} \rightarrow \mathbf{R}$ is differentiable at x . If a_n and b_n are such that $\forall n, a_n \leq x \leq b_n$, then

$$h'(x) = \lim_{n \rightarrow \infty} \frac{h(b_n) - h(a_n)}{b_n - a_n}$$



Section 3. **Stretching zero to one.**

Cantor's Middle Third Set **C** is a subset of $[0, 1]$ formed inductively

by deleting middle third open intervals.

Say $(\frac{1}{3}, \frac{2}{3})$ in step one.

In step two, remove the middle-thirds of the remaining two intervals of step one, they are $(\frac{1}{9}, \frac{2}{9})$ and $(\frac{7}{9}, \frac{8}{9})$.

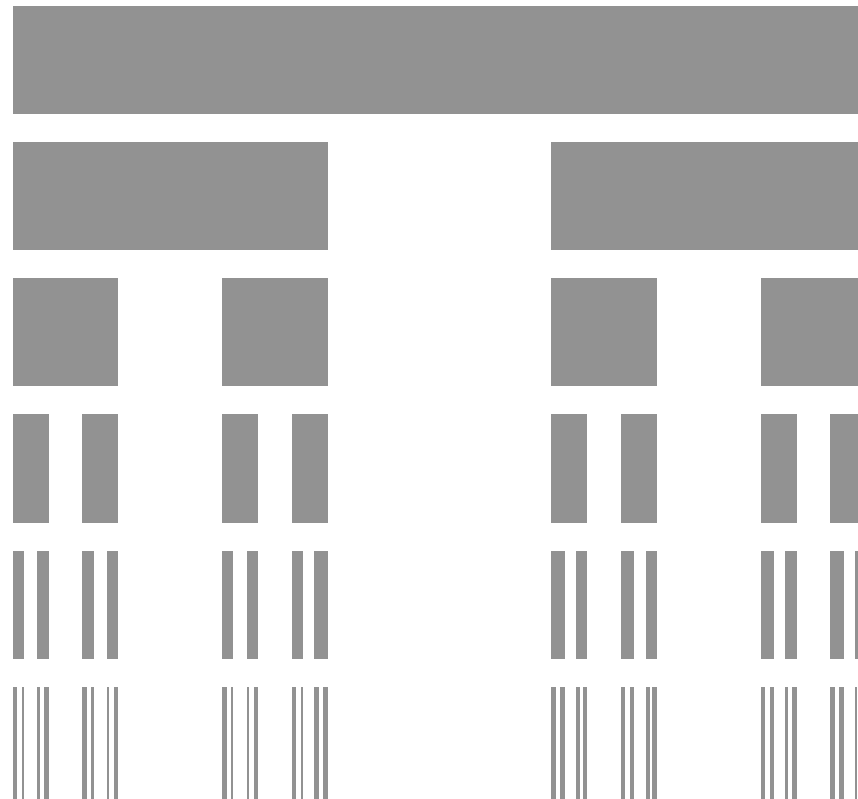


In step three, remove the middle thirds of the remaining four intervals.

and so on for infinitely many steps.

What we get is **C**, *Cantor's Middle Thirds Set*.

C is very “thin” and a “spread out” set whose measure is 0 (since the sum of the lengths of intervals removed from $[0,1]$ is 1).

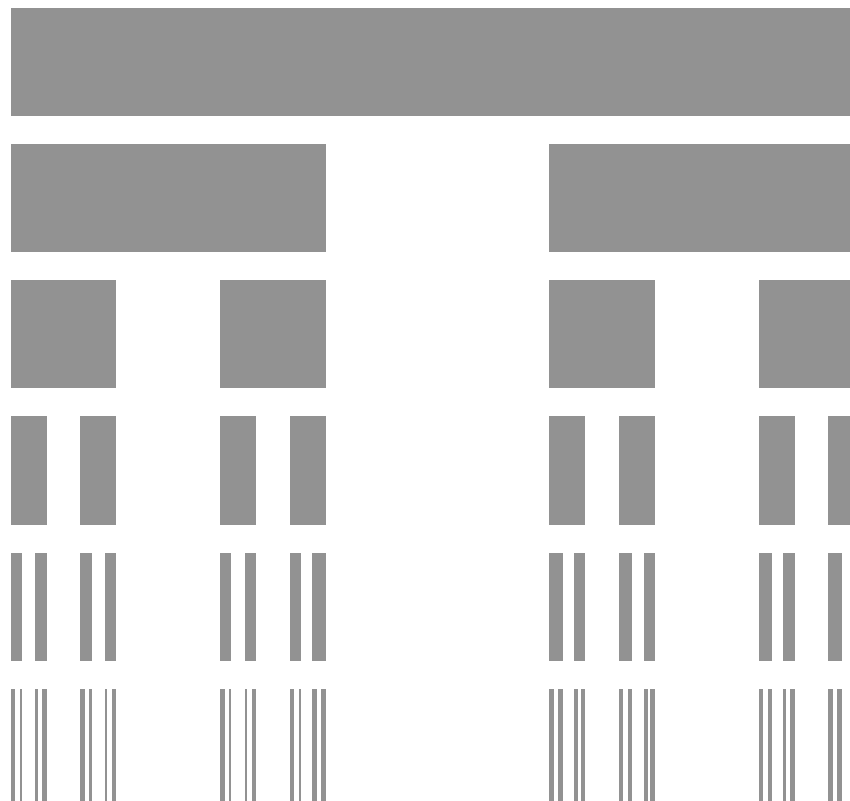


Cantor's Middle Thirds set

As $[0,1]$ is thick and as \mathbf{C} is a thin subset of $[0,1]$, the following is surprising:

THEOREM 3.

There is a continuous function from \mathbf{C} onto $[0,1]$.



Cantor's Middle Thirds set

THEOREM 3. There is a continuous function from **C** onto $[0, 1]$.

The points of **C** are the points equal to the sums of infinite series of form

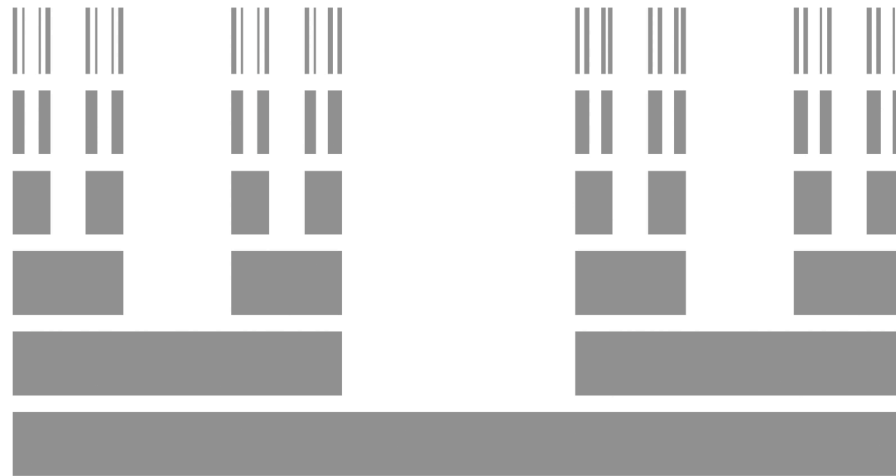
$$\sum_{n=1}^{\infty} 2s(n)3^{-n} \quad \text{where } s(n) \in \{0, 1\}.$$

$$F\left(\sum_{n=1}^{\infty} 2s(n)3^{-n}\right) = \sum_{n=1}^{\infty} s(n)2^{-n}$$

defines a continuous surjective function whose domain is **C** and whose range is $[0, 1]$.

Example. The two geometric series show $F(1/3) = F(2/3) = 1/2$.

Picturing the proof.



Stretch the two halves of step 1 until they join at $1/2$.

Now stretch the two halves of each pair of step 2

Until they join at $1/4$ and $3/4$...

Each point is moved to the sum of an infinite series.

Section 4. Advancing Dimension

$$\mathbf{N} \iff \mathbf{N}^2$$

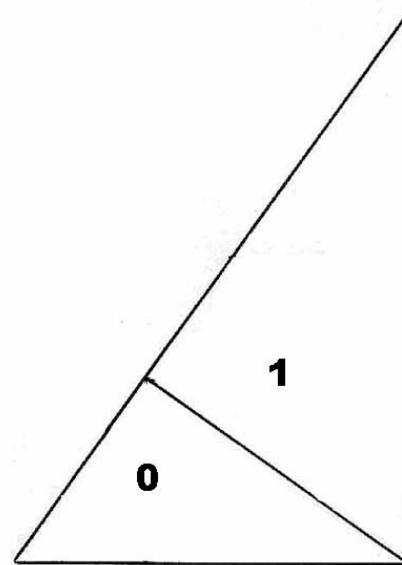
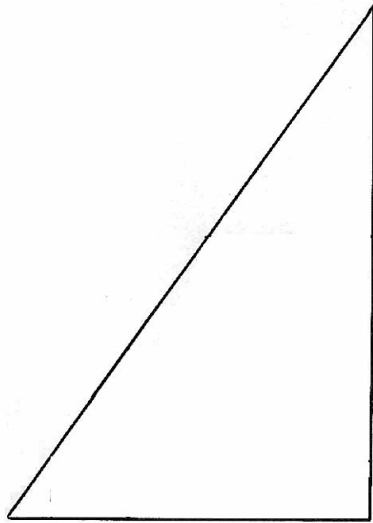
$$2^{n-1}(2m-1) \iff \langle m, n \rangle$$

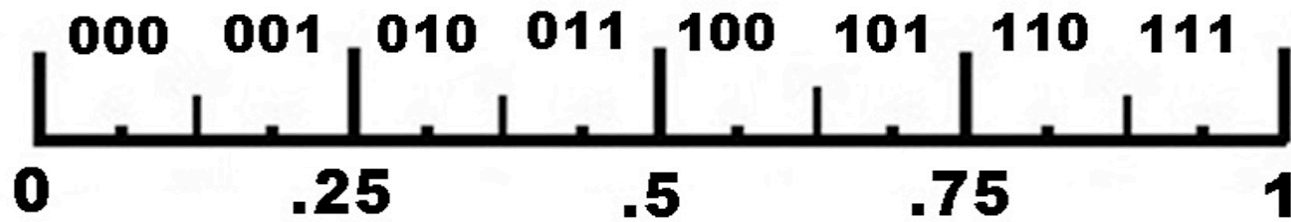
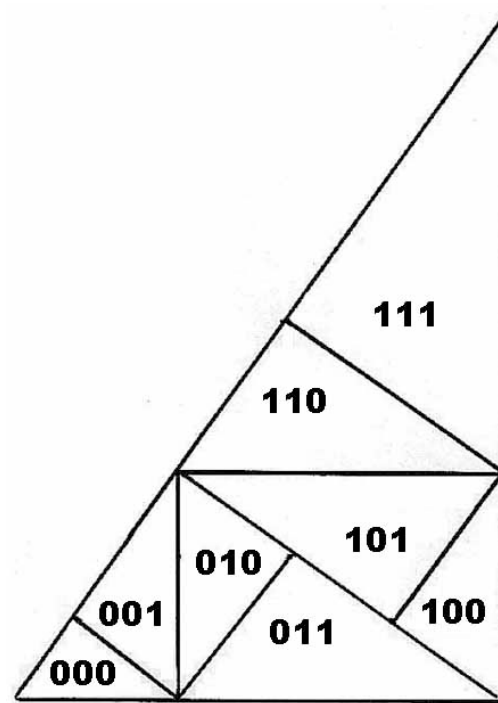
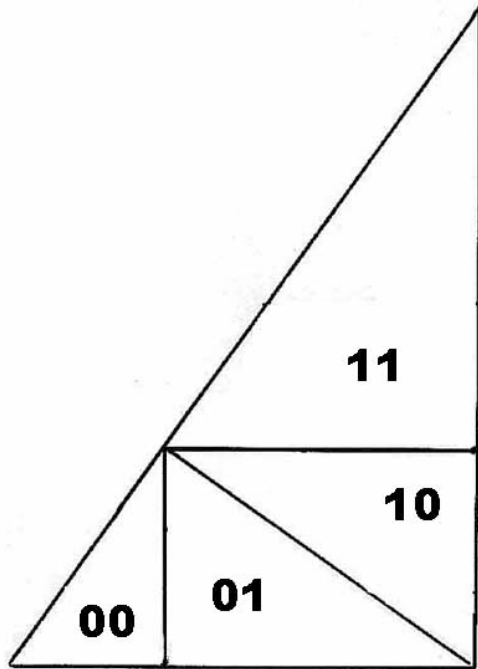
	1	2	3	4
1	1	2	4	8
2	3	6	12	24
3	5	10	20	40
4	7	14	28	56

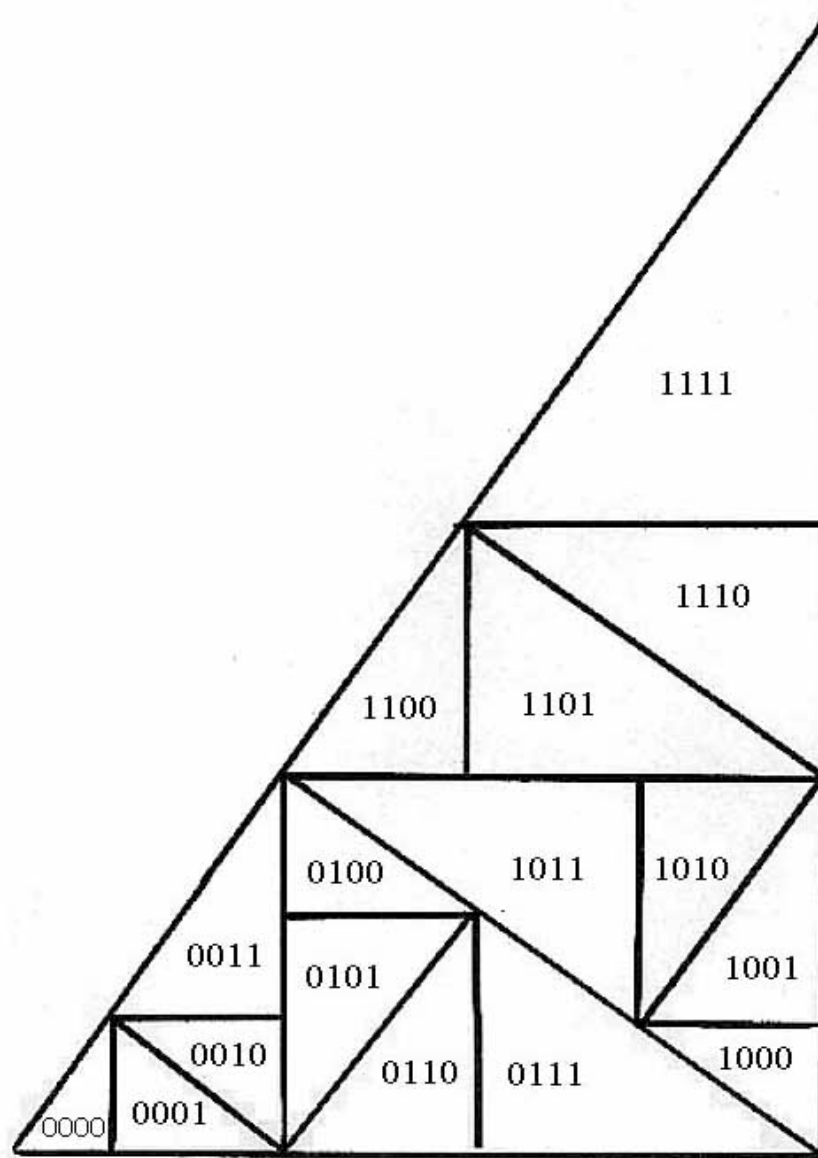
	1	2	3	4
1	<1,1>	<1,2>	<1,3>	<1,4>
2	<2,1>	<2,2>	<2,3>	<2,4>
3	<3,1>	<3,2>	<3,3>	<3,4>
4	<4,1>			

Theorem 4. There is a continuous function from $[0, 1]$ onto the square.

We'll cheat and do it with the triangle.




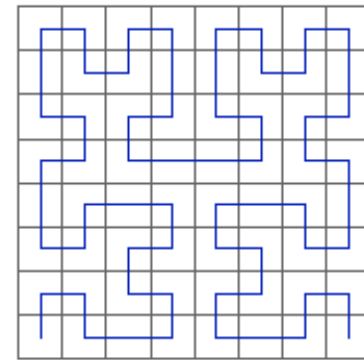
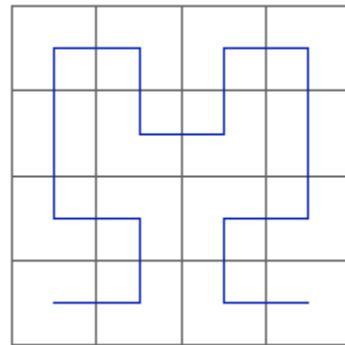
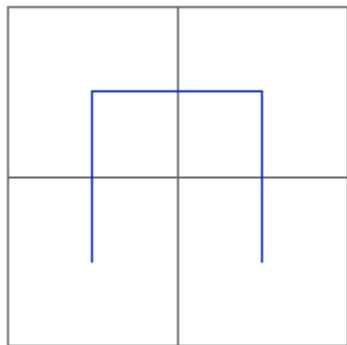






An java animated version of a different Space Filling Curve can be found at

http://www.geom.uiuc.edu/~dpvc/CVM/1998/01/vsfcf/article/sect2/brief_history.html



Section 5. An addition for the irrationals

By an *addition* for those objects $X \in [0, \infty)$ we mean a continuous function $s : X \times X \rightarrow X$ (write $x+y$ instead of $s(\langle x, y \rangle)$) such that for $x+y$ the following three rules hold:

- (1). $x+y = y+x$ (the commutative law) and
- (2). $(x+y)+z = x+(y+z)$ (the associative law).

With sets like **Q**, the set of positive rationals, the addition inherited from the reals **R** works, but with the set **P** of positive irrationals it does not work: $(3+\sqrt{2})+(3-\sqrt{2}) = 6$.

THEOREM5.

The set **P** of positive irrationals has an addition.

Our aim is to consider another object which has an addition
And also “looks like” **P**.

Continued fraction

$$a_0^+ \frac{1}{a_1^+ \frac{1}{a_2^+ \frac{1}{a_3^+ \cdots}}}$$

Given an irrational x , the sequence $\langle a_n \rangle$ is computed as follows:

Let $G(x)$ denote the greatest integer $\leq x$. Let $a_0 = G(x)$.

If a_0, \dots, a_n have been found as below, let $a_{n+1} = G(1/r)$.

$$x = a_0 + \frac{1}{a_1 + \frac{1}{a_2 + \frac{1}{\dots + \frac{1}{a_n + r}}}}$$

Continuing in this fashion we get a sequence which converges to x . Often the result is denoted by

$$x = a_0 + \frac{1}{a_1 + \frac{1}{a_2 + \frac{1}{a_3 + \dots}}}$$

However, here we denote it by $CF(x) = \langle a_0, a_1, a_2, a_3, \dots \rangle$.

We let $\langle \underline{2} \rangle$ denote the constant $\langle 2, 2, 2, 2, \dots \rangle$.

Note $\langle \underline{2} \rangle = \text{CF}(1 + \sqrt{2})$ since

$$2 + \frac{1}{2 + \frac{1}{2 + \frac{1}{2 + \frac{1}{2 + \frac{1}{2 + \dots}}}}} = 1 + \sqrt{2}$$

Hint: A quick way to prove the above is to solve for x in $x = 2 + \frac{1}{x}$ or $x^2 - 2x - 1 = 0$.

Prove $\langle \underline{1} \rangle = \text{CF}\left(\frac{1+\sqrt{5}}{2}\right)$ and $\langle \underline{1,2} \rangle = \text{CF}\left(\frac{2+\sqrt{3}}{2}\right)$

We add two continued fractions “pointwise,” so $\langle \underline{1} \rangle + \langle \underline{1,2} \rangle = \langle \underline{2,3} \rangle$ or $\langle 2,3,2,3,2,3,2,3,\dots \rangle$.

Here are the first few terms for π , $\langle 3,7,15,1,\dots \rangle$.

No wonder your grade school teacher told you $\pi = 3 + \frac{1}{7}$. The first four terms of $\text{CF}(\pi)$, $\langle 3,7,15,1 \rangle$ approximate π to 5 decimals.

Here are Euler’s first few terms for e ,

$\langle 2,1,2,1,1,4,1,1,6,1,1,8,1,1,10,1,1,12,\dots \rangle$

Lemma. Two irrationals x and y are "close" as real numbers iff the "first few" partial continued fractions of $CF(x)$ and $CF(y)$ are identical.

For example $\langle 2,2,2,2,2,1,1,1,\dots \rangle$ and $\langle \underline{2} \rangle$ are close,
but $\langle 2,2,2,2,2,2,2,2,2,91,5,5,\dots \rangle$ and $\langle \underline{2} \rangle$ are closer.

Here is the "addition:" We define $x \oplus y = z$ if
 $CF(z) = CF(x) + CF(y)$.
Then the lemma shows \oplus is continuous.

However, strange things happen:

$$\frac{1 + \sqrt{5}}{2} \oplus \frac{1 + \sqrt{5}}{2} = 1 + \sqrt{2}$$

Problems

1. How many derivatives has

$$g(x) = x^2 \sin \frac{1}{x}$$

2. Prove that each number in $[0,2]$ is the sum of two members of the Cantor set.

Problems

3. Prove there is no distance non-increasing function whose domain is a closed interval in \mathbf{N} and whose range is the unit square $[0,1] \times [0,1]$.

4. Determine $\sqrt{2} \oplus \frac{2+\sqrt{3}}{2}$

BUFFALO
SPACEPORT OF THE FUTURE



BUFFALO

SPACEPORT OF THE FUTURE



BUFFALO
SPACEPORT OF THE FUTURE



A photograph of a rocket launch over a city skyline. The rocket is ascending vertically, leaving a thick, white and grey plume of smoke and fire. The city skyline in the background includes several tall buildings, some with distinctive architectural features like a pointed top. The sky is blue with scattered white clouds. The text "BUFFALO SPACEPORT OF THE FUTURE" is overlaid in a bold, black, serif font with a white outline, centered over the rocket's plume.

**BUFFALO
SPACEPORT OF THE FUTURE**